



Sample Question Paper for CET – 2023

Class - VI

Max. Marks: 100

Time: 01 Hour

Subject: English

Section A (Reading – 30 Marks)

A. Read the following passage carefully and answer the questions that follow:

1. The great Greek hero Hercules had to complete twelve difficult tasks, called the twelve labours. One of them was cleaning out the stables of Augeas, the King of Elis.
2. Augeas' stables were renowned, not only for their huge size and the vast numbers of cattle they contained, but also for their extreme dirt, garbage and filth. The stables had not been cleaned since they were built and there was a mountain of dirt and dung. Hercules, with all his strength, would not have managed it in a hundred years.
3. When Hercules saw the stables, he was shocked. So far all the tasks he had completed were worth his heroism. This was scavenger's job! Hercules demanded to be paid one-tenth of the cattle that Augeas owned. Augeas agreed, because he was sure that the hero would never be able to finish the task.
4. Hercules glimpsed the kingdom's main river Alpheus glinting in the sun. Immediately he found the answer. He would change the direction of the river. Hercules started digging near the river's source to the stable's main entrance. He made the channel narrow, so that the water gushed with tremendous force, sweeping through the stable and carrying all the litter out with it. Such was its power that not a scrap of litter was left!
5. It is said that Augeas refused to give Hercules his reward because he said that it was the river and not Hercules that had cleaned his stables. The legend has given us the phrase "**Cleaning the Augean Stables**". It means the (Herculean) task of getting rid of corruption especially in government departments.

1. Hercules was a Greek hero who
 - (a) had to complete two difficult tasks.
 - (b) had to complete twelve difficult tasks.
 - (c) had to complete two difficult labours.
2. Augeas' the King of Elis ordered Hercules to
 - (a) clean his palace.
 - (b) clean his courtyard.
 - (c) clean his stables.
3. What were Augeas' stables famous for?
4. Augeas' stables were too much filthy because
5. Why did King Augeas agree to pay one tenth of his cattle to Hercules?
6. What plan did Hercules make to clean the stables?

- (a) Work with a large number of labourers to clean the stables.
(b) Seek help from King Augeas.
(c) Change the direction of the river.
7. The channel of the river was dug narrow so that
8. The phrase 'cleaning the Augean Stables' means
(a) the (Herculean) task of getting rid of corruption especially in government departments.
(b) the (Herculean) task of getting rid of nepotism especially in Film Industry.
(c) the (Herculean) task of getting the work done in government departments.
9. Choose the correct option for the meaning of the word 'renowned':
(a) anonymous
(b) known
(c) eminent
10. Give the meaning of the word 'glinting' in the passage.

Section B (Writing – 40 Marks)

B 1. Write a paragraph in 100 words on any ONE of the following:

My Favourite Book

Or

The Haunted Night

Or

B 2. Write an interesting factual description of the gardener of your school in 100 words. In your description you must include the following points:

- Name and age
- Looks and personality
- Habits
- Qualities

OR


B.3 Make a Diary entry in 100 words about your visit to the Taj Mahal.

Key points to be included are mentioned below:

- Status in the world.
- Location..... Built by and how in.....
- Made of and shape.
- Any other special features.....

OR

B. 4 Look at the following picture and describe the scene in about 100 words. Suggest a suitable title for it.



Or

B. 5 Read the given outline carefully and write a story in 100 words. Provide a suitable title.

A vain stag was thirsty reached a pool his own reflection glad to see his horns hated his thin and ugly legs hounds ran after him stag ran for life his leg carried him out of danger but his horns got stuck in bushes provided to be the cause of his death.

Section C (Grammar – 30 Marks)

C.1 Fill in the blanks with suitable prepositions:

Tom gave Sid a parrot made (a) wood and a dead mouse (b) only two legs as a reward (c) whitewashing a part (d) the fence. Meanwhile, another friend (e) Tom's request agreed to finish the

remaining job. No sooner did this friend dip the brush (f) the bucket, than he was called home (g) his mother. Now Tom was (h) a fix .

C.2 Change the gender of the following nouns:

1. Cow _____
2. Poet _____
3. Cock _____

C.3 Change the number of the nouns in the following sentences:

1. He did a mischief.

2. The man gave me an advice.

3. His house is built of stone.

C.4 Fill in the suitable Article (A, An, The) in the following sentences:

1. India is _____ great country.
2. _____ life style of people has completely changed now _____ days.
3. Ram wins _____ men's title.
4. It was _____ interesting match.

C.5 Fill in the blanks with the correct form of the verb given in brackets.

1. The sun _____ (rise) in the East.

2. He _____ (water) the plants since morning.

3. They _____ (pull) down the wall yesterday.

4. He _____ (leave) for Delhi tomorrow.

5. The patient _____ (die) when the doctor came.

C.6 Put the words in the correct order and write the sentences.

1. my/ gone/ mother/ back/ has/ the/ from/ hospital

2. so/ you/ what/ happy/ hear/ makes/ this/ to?

3. are/ chocolates/ there/ twenty/ basket/ her/ in/ near/ kitchen/ the

4. habit/ inculcate/ one/ the/ reading/ should/ of

5. lived/ forty/ we/ in/ together/ years/ Mumbai/ for

Subject: Hindi

भाग क : पठन कौशल – (30 –Marks)

प्रश्न- निम्नलिखित गद्यांश पढ़कर दिए गए प्रश्नों के उत्तर लिखिए -

अच्छे चरित्र से ही मनुष्य का जीवन गौरवपूर्ण बनता है, धन, पदवी, ऊँची शिक्षा आदि से नहीं। सच्चरित्र व्यक्ति अपने अच्छे व्यवहार से जीवन तथा समाज में सभी को शीघ्र एवं सहज ही प्रभावित कर लिया करता है। इस कारण सभी लोग उसका सम्मान भी करते हैं तथा उसकी हर बात पर विश्वास भी करते हैं। चरित्र की वास्तविक कसौटी व्यक्ति के जीवन में आने वाले संकट की घड़ी है। सच्चरित्रता के निर्माण का एक – मात्र साधन सत्संगति है। चरित्र निर्माण के लिए सबसे उपयुक्त समय शैशवकाल व शिक्षण काल होता है। अतः माता – पिता को अपने बच्चों का इस समय विशेष ध्यान रखना चाहिए। आदर्श विद्यार्थी वह है जो ज्ञान या विद्या की प्राप्ति को जीवन का पहला आदर्श मानता हो। जिसे विद्या की चाह नहीं वह आदर्श विद्यार्थी नहीं हो सकता। यह विद्या ही है जो मनुष्य को विनम्र, सहनशील और गुणवान बनाती है।

- (क) अच्छे चरित्र से जीवन पर क्या प्रभाव पड़ता है?
- (ख) चरित्र निर्माण के लिए सबसे उपयुक्त समय कौन-सा है?
- (ग) आदर्श विद्यार्थी में कौनसे गुण होने चाहिए?
- (घ) विद्या हमारे जीवन में क्या परिवर्तन लाती है?
- (ङ) इस गद्यांश का उचित शीर्षक क्या होगा?

भाग- ख : व्यावहारिक व्याकरण (30-Marks)

प्रश्न- निम्नलिखित शब्दों के विलोम शब्द लिखिए -

सुन्दर , हँसना , भली

प्रश्न- निम्नलिखित वाक्यों में से विशेषण – विशेष्य छाँटकर लिखिए

हरा तोता पिंजरे में।

)क(हरा-

) ख(कई तरह के सुन्दर खेल।

) ग (गुड़िया भी बहुत भली।

प्रश्न- निम्नलिखित शब्दों के पर्यायवाची शब्द लिखिए -

आँख , फूल , धरा

प्रश्न- निम्नलिखित शब्दों के लिंग बदलिए -

भाई , शेर , डिब्बा

प्रश्न- निम्नलिखित अशुद्ध शब्दों को शुद्ध करके लिखिए -

लड़कि , हे , सुरज

खंड – ग : रचनात्मक लेखन (40 – Marks)

प्रश्न- निम्नलिखित में से किसी एक विषय पर 70 – 80 शब्दों विषय पर अनुच्छेद लिखिए-

‘इन्टरनेट के लाभ और हानियाँ’

अथवा

‘मेरे जीवन का लक्ष्य’

प्रश्न - दिए गए चित्र को देखकर अपने मन में उभरे विचारों को अपनी भाषा में प्रस्तुत कीजिए ।



SUBJECT: MATHEMATICS

SECTION -A (1 Mark each) - 10

1. The value of half of one third of 36 is
2. The number of seconds in half an hour is
3. Fraction for 0.0605 is
4. 0.36 hm is how many dm?

SECTION-B (5 Marks each) - 10

1. From the sum of 81.62 & 210.54 subtract the sum of 18.75 & 105.92.
2. Evaluate: $50 + [100 - \{35 - (30 - 20) \div 2\} \times 3] \times 5$.
3. Cost of 25 m of cloth is Rs. 1575, how much cloth can be bought for Rs. 2016?
4. Simplify: $5\frac{3}{4} - 3\frac{2}{3} + 4\frac{5}{6}$

SECTION- C (10 Marks each) - 4

1. Ramesh saved Rs.3,950.75 in the month of April, Rs. 2,684 in the month of May and

Rs. 4,976.45 in the month of June. He spent Rs. 1,928.65 to buy his books, Rs. 3,750.85 on his PG charges and Rs. 2,850.35 on his swimming classes. How much money is he left with?

2. Bunty walked $1\frac{5}{8}$ km and then took a bus and travelled $3\frac{1}{6}$ km. In the end he took a taxi and travelled $\frac{11}{4}$ km and again walked $\frac{2}{3}$ km. Find the total distance travelled by him. Also, find how much more distance he travelled by a vehicle than he walked.



Time: 01 Hour

Max. Marks: 100

SUBJECT: SCIENCE

Q1. Fill in the blanks:

- 1) The baby plant between the cotyledons is called_____.
- 2) Seeds of _____ have wings for dispersal.

Q2. State: TRUE or FALSE.

- 1) A pencil eraser uses gravitational force to rub off mistakes_____.
- 2) A wheel barrow is a second-class lever_____.
- 3) The large-scale movement of animals in search of food is called camouflage_____.

Q3. Answer the following questions


1. Why do plants grow better in soil than in sand?

2. What are rodents? Give two examples.

Q4. Match the following:

No.	Column A	No.	Column B
1	Sprains	a	cover the victim with a blanket and ask him to roll on the ground
2	Fractures	b	wash the area under running water and apply ice
3	Burns	c	apply ice pack and do not move the victim
4	Animal bites	d	use a splint and do not move the bone
5	Fire	e	wash the affected area with soap and water, and then apply an antiseptic cream

Q5. Complete the following crossword puzzle:

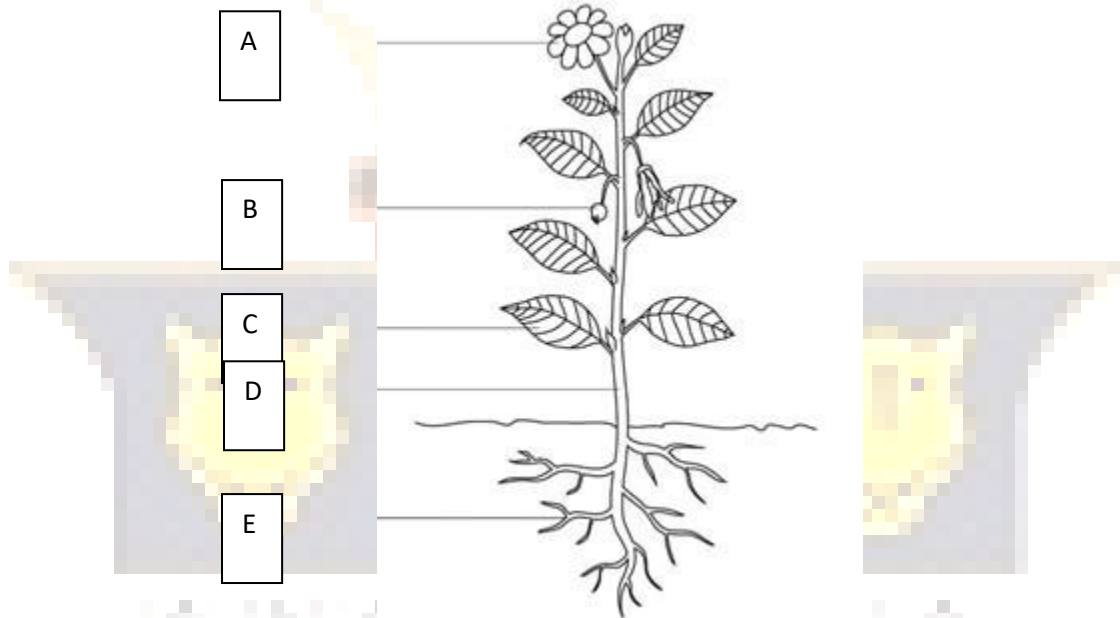


No.	Across	No.	Down
1	A place where an animal lives, breeds and takes shelter	2	Sharp curved claws used to catch prey.
3	Waxy covering found in some insects.	4	. Bread mould reproduces by_____
7	A long thin tube in insects to suck blood	5	Holes on bodies of insects for breathing
8	A baby plant.	6	Small mammals with sharp teeth for gnawing.
9	A network of breathing tubes in insects		

10

Sharp needle like spines on porcupine for self defense

Q6. Label the parts shown below.



A _____ **B** _____ **C** _____ **D** _____

E _____

